







# Tell the Time: Writing the Time

Write the time shown on each clock.



\_\_\_\_\_

\_\_\_\_\_

\_\_\_\_\_

\_\_\_\_\_

\_\_\_\_\_

\_\_\_\_\_

\_\_\_\_\_







\_\_\_\_\_

\_\_\_\_\_

\_\_\_\_\_

\_\_\_\_\_

\_\_\_\_\_



\_\_\_\_\_

\_\_\_\_\_

\_\_\_\_\_

\_\_\_\_\_

\_\_\_\_\_

\_\_\_\_\_

\_\_\_\_\_







\_\_\_\_\_

\_\_\_\_\_

\_\_\_\_\_

\_\_\_\_\_

\_\_\_\_\_



\_\_\_\_\_

\_\_\_\_\_

\_\_\_\_\_

\_\_\_\_\_

\_\_\_\_\_

\_\_\_\_\_

\_\_\_\_\_







\_\_\_\_\_

\_\_\_\_\_

\_\_\_\_\_

\_\_\_\_\_

\_\_\_\_\_



\_\_\_\_\_

\_\_\_\_\_

\_\_\_\_\_

\_\_\_\_\_

\_\_\_\_\_

\_\_\_\_\_

\_\_\_\_\_

\_\_\_\_\_

\_\_\_\_\_


\_\_\_\_\_

\_\_\_\_\_


\_\_\_\_\_

# Tell the Time: Drawing the Time


Draw the time on each clock.




9 o'clock




half past 3




6 o'clock




half past 4




quarter past 2




half past 1




quarter to 11




11 o'clock




half past 2




5 o'clock



quarter past 1




half past 5




quarter to 8




3 o'clock



half past 6



quarter to 1




half past 7




quarter past 8




10 o'clock




half past 12



quarter past 11



quarter to 4




half past 6




2 o'clock

# Tell the Time: Writing the Time


## Answers




3 o'clock




half past 8




quarter to 1




12 o'clock




half past 6




quarter past 8



quarter past 5




half past 1




6 o'clock




half past 4




half past 3




2 o'clock




quarter past 12




half past 7




quarter to 8




5 o'clock



half past 2




quarter to 3




half past 9




1 o'clock




quarter to 6



half past 10




half past 11




4 o'clock

# Tell the Time: Drawing the Time


## Answers




9 o'clock




half past 3




6 o'clock




half past 4




quarter past 2




half past 1




quarter to 11




11 o'clock



half past 2




5 o'clock




quarter past 1



half past 5




quarter to 8




3 o'clock




half past 6




quarter to 1




half past 7




quarter past 8




10 o'clock




half past 12




quarter past 11



quarter to 4



half past 6



2 o'clock